

# YEAR 2005

## PUPIL'S COMPLETE INDEX NUMBER

Province/City

--	--

District

--	--

Sector

--	--

School

--	--

Pupil

--	--	--

## PUPIL'S FULL NAME

SUR NAME: \_\_\_\_\_

OTHER NAMES: \_\_\_\_\_

## REVISION OF EXTRACTED QUESTIONS FROM PRIMARY LEAVING EXAMINATION 2005

### SOCIAL STUDIES

Duration: 2 hours

Attempt all questions (100 Marks)

1. a. Name the mountain on which God gave Moses the Ten Commandments. (1 mark)  
\_\_\_\_\_
- b. Name the sea the Israelites crossed on their way from Egypt to the Promised Land. (1 mark)  
\_\_\_\_\_
- c. Who were the first two disciples of Jesus? (2 marks)  
\_\_\_\_\_  
\_\_\_\_\_
2. a. What does Allah mean? (1 mark)  
\_\_\_\_\_
- b. Name the prayer house for Muslims. (1 mark)  
\_\_\_\_\_
- c. Name the town in which Mohammed was born. (1 mark)  
\_\_\_\_\_
3. Name the ministry responsible for immunization/vaccination of children. (1 mark)  
\_\_\_\_\_
4. How many districts are in Rwanda? (1 mark)  
\_\_\_\_\_
5. Give two ways of behaving politely at school. (2 marks)  
\_\_\_\_\_  
\_\_\_\_\_
6. Give one reason why peace is important to our community. (1 mark)  
\_\_\_\_\_
7. Which African country is not a member of the African Union (AU)? (1 mark)  
\_\_\_\_\_
8. a. What does COMESA mean? (1 mark)  
\_\_\_\_\_
- b. Who is the current chairman of COMESA? (1 mark)  
\_\_\_\_\_

c. Name the newest member of COMESA? (1 mark)

9. What is the name of the new pope? (1 mark)

10. State the national motto of Rwanda. (1 mark)

11. Give two uses of a post office. (2 marks)

12. The Rwandan parliament is divided into two chambers. Name them. (2 marks)

13. Name any two European countries that had colonies in Africa. (2 marks)


14. Which African country got independence on the same day as Rwanda? (1 mark)

15. Name two African countries that were never colonized. (2 marks)

16. Name the UN force that was in Rwanda during the 1994 genocide. (1 mark)

17. Give two ways how HIV/AIDS has affected the development of our mother country Rwanda. (2 marks)

18. a. Name the type of transport shown below. (1 mark)



b. Give two towns in Rwanda between which the above type of transport can be used.

c. Why is it that a few people use this type of transport in Rwanda? (1 mark)

19. a. Which type of transport is used in deserts? (1 mark)

b. Why is road transport in Ruhengeri very difficult? (1 mark)

20. a. What title was given to the king of Egypt? (1 mark)

b. Why are the following remembered in Egyptian civilization? (2 marks)

i. Pyramids

ii. Papyrus



21. a. Which is the main bank of Rwanda? (1 mark)  
\_\_\_\_\_
- b. State any two problems facing banks in Rwanda. (2 marks)  
\_\_\_\_\_  
\_\_\_\_\_
22. List the four major climatic types of Africa. (4 marks)  
\_\_\_\_\_  
\_\_\_\_\_  
\_\_\_\_\_  
\_\_\_\_\_
23. a. Name any two countries that took colonies in Africa. (2 marks)  
\_\_\_\_\_  
\_\_\_\_\_
- b. Give any two reasons why countries were interested in colonizing Africa. (2 marks)  
\_\_\_\_\_  
\_\_\_\_\_
24. a. State any two problems faced by the first group of foreigners who came to Africa. (2 marks)  
\_\_\_\_\_  
\_\_\_\_\_
- b. Who was the first European to come to Rwanda? (1 mark)  
\_\_\_\_\_
25. a. What is slave trade? (1 mark)  
\_\_\_\_\_
- b. Name any two African countries where slave trade took place. (2 marks)  
\_\_\_\_\_  
\_\_\_\_\_
26. When do Rwandans celebrate these events? (2 marks)
- a. Independence day  
\_\_\_\_\_
- b. Heroes day  
\_\_\_\_\_
27. Name the type of budget whose; (2 marks)
- a. Expenditure is greater than income  
\_\_\_\_\_
- b. Projected income is equal to the estimated expenditure  
\_\_\_\_\_
28. a. Who introduced Catholicism in Rwanda? (1 mark)  
\_\_\_\_\_
- b. Who heads the Roman Catholics Church? (1 mark)  
\_\_\_\_\_
29. a. Where in Rwanda was the first Mosque constructed? (1 mark)  
\_\_\_\_\_
- b. How do we call a holly book for Muslims? (1 mark)  
\_\_\_\_\_
30. a. Who was the last King of Rwanda before European administration? (1 mark)  
\_\_\_\_\_
- b. What was the name of the King who promoted equality of all the people of Rwanda? (1 mark)  
\_\_\_\_\_
- c. Which King of Rwanda went to exile after elections of 1961? (1 mark)  
\_\_\_\_\_

a. Name towns 1 and 2. (2 marks)

- 1. \_\_\_\_\_
- 2. \_\_\_\_\_

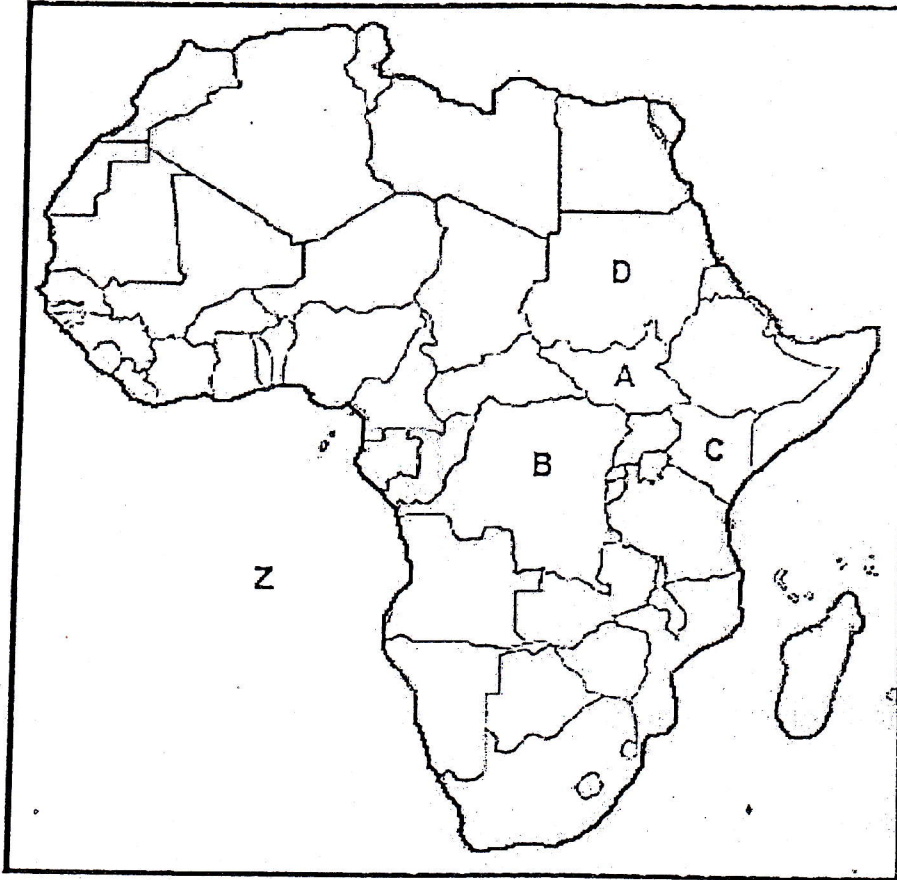
b. Name the capital city of country X. (1 mark)

\_\_\_\_\_

c. Name the national mark marked K. (1 mark)

\_\_\_\_\_

39. Study the map of Africa below and answer questions that follow.



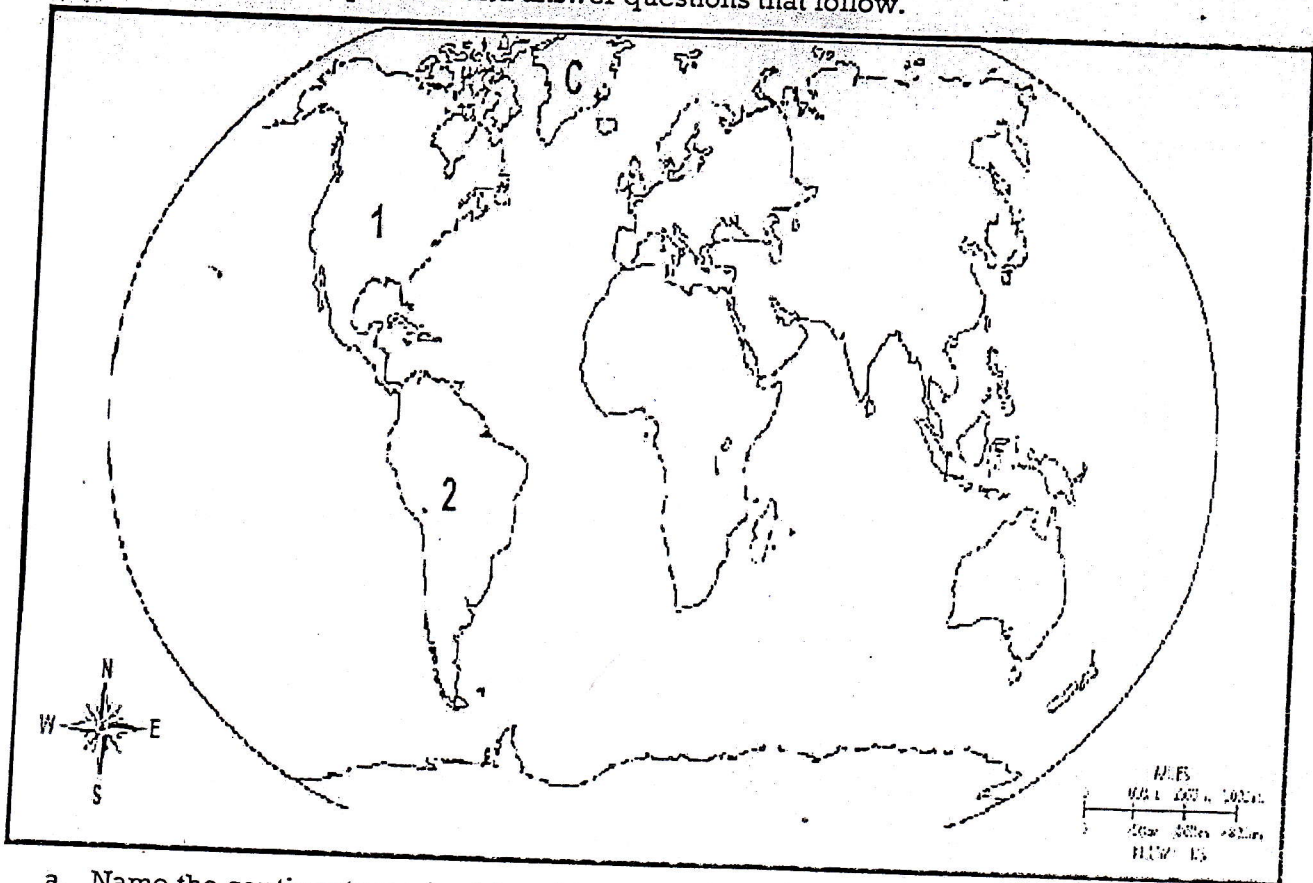
a. Name the countries marked A, B, C and D (4 marks)

- A. \_\_\_\_\_
- B. \_\_\_\_\_
- C. \_\_\_\_\_
- D. \_\_\_\_\_

b. Name the ocean marked Z. (1 mark)

\_\_\_\_\_

40. Study the world map below and answer questions that follow.



- a. Name the continents marked 1 and 2. (2 marks)
1. \_\_\_\_\_
2. \_\_\_\_\_
- b. Name the island marked C. (1 mark)
- \_\_\_\_\_
- c. Name the highest mountain in the world. (1 mark)
- \_\_\_\_\_
- d. Which is the largest continent? (1 mark)
- \_\_\_\_\_
- e. Name the largest river in South America. (1 mark)
- \_\_\_\_\_

**END**